

九十八學年四技二專第三次聯合模擬考試 共同考科 數學(C)卷 詳解

數學(C)卷

98-3-C

1	2	3	4	5	6	7	8	9	10	11	12	13	14	15	16	17	18	19	20	21	22	23	24	25
D	D	B	C	B	A	A	C	D	D	B	C	B	B	A	A	C	D	B	C	A	C	D	D	B

1. 由已知 $f(3+t) = f(3-t)$ 可知拋物線的對稱軸方程式

$$\text{爲 } x = \frac{3+t+3-t}{2} = 3, (3, f(3)) \text{ 爲最低點}$$

$\therefore f(3)$ 爲最小值，而 x 愈接近 3，函數值愈小

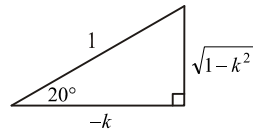
$$\therefore f(3) < f(2) < f(0)$$

2. $\cos 560^\circ = -\cos 20^\circ = k$

$$\Rightarrow \cos 20^\circ = -k$$

$$\sin 860^\circ = \sin 40^\circ$$

$$= 2 \sin 20^\circ \cos 20^\circ = 2(\sqrt{1-k^2})(-k) = -2k\sqrt{1-k^2}$$



3. $\therefore \tan \alpha + \tan \beta = 3, \tan \alpha \cdot \tan \beta = 2$

$$\therefore \tan(\alpha + \beta) = \frac{\tan \alpha + \tan \beta}{1 - \tan \alpha \tan \beta} = \frac{3}{1-2} = -3$$

$$\therefore \sin^2(\alpha + \beta) = \left(\frac{\pm 3}{\sqrt{10}}\right)^2 = \frac{9}{10}$$

4. (A) 週期爲 $\frac{2\pi}{2} = \pi$

$$(B) f(x + \pi) = 3 \cos(2x + 2\pi + \frac{\pi}{4})$$

$$= 3 \cos(2x + \frac{\pi}{4}) = f(x)$$

(C) $\therefore y$ 的最大值爲 3， y 的最小值爲 -3， \therefore 和爲 0

$$(D) \therefore f(\frac{\pi}{2}) = 3 \cos(\pi + \frac{\pi}{4}) = -\frac{3}{2}\sqrt{2}$$

$$f(-\frac{\pi}{2}) = 3 \cos(-\pi + \frac{\pi}{4}) = -\frac{3}{2}\sqrt{2}$$

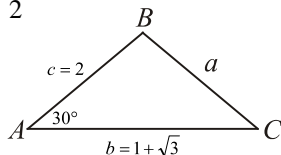
$$\therefore f(\frac{\pi}{2}) + f(-\frac{\pi}{2}) = -3\sqrt{2}$$

5. 由餘弦定律 $a^2 = b^2 + c^2 - 2bc \cos A$

$$= (1 + \sqrt{3})^2 + 2^2 - 2(1 + \sqrt{3}) \cdot 2 \cdot \frac{\sqrt{3}}{2}$$

$$= 1 + 2\sqrt{3} + 3 + 4 - 2\sqrt{3} - 6 = 2$$

$$\therefore a = \sqrt{2} = BC$$



$$\text{由正弦定律 } \frac{a}{\sin A} = \frac{c}{\sin C} \Rightarrow \frac{\sqrt{2}}{\sin 30^\circ} = \frac{2}{\sin C} \Rightarrow \sin C = \frac{1}{\sqrt{2}}$$

$$\Rightarrow \angle C = 45^\circ (\because \text{邊長 } b \text{ 最大, } \therefore \angle C = 135^\circ \text{ 不合})$$

$$\therefore \angle B = 180^\circ - 45^\circ - 30^\circ = 105^\circ$$

$$\Delta ABC = \frac{1}{2}bc \sin A = \frac{1}{2}(1 + \sqrt{3}) \times 2 \times \frac{1}{2} = \frac{1}{2} + \frac{\sqrt{3}}{2}$$

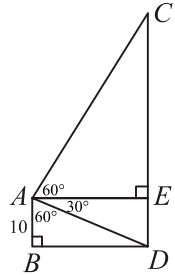
6. $\therefore \overline{AB} = 10$

$$\therefore \overline{BD} = 10\sqrt{3} = \overline{AE}$$

$$\text{而 } \overline{CE} = 10\sqrt{3} \times \sqrt{3} = 30$$

$$\therefore \overline{CD} = \overline{CE} + \overline{ED}$$

$$= 30 + 10 = 40 \text{ (m)}$$



7. $\overline{AB} \cdot \overline{BC} = (-\overline{BA}) \cdot \overline{BC} = -(\overline{BA} \cdot \overline{BC}) = -|\overline{BA}| |\overline{BC}| \cos B$

$$= -(6 \times 7 \times \frac{6^2 + 7^2 - 5^2}{2 \times 6 \times 7}) = -30$$

8. \vec{a} 在 \vec{b} 上之正射影長爲 $\frac{|\vec{a} \cdot \vec{b}|}{|\vec{b}|} = \frac{|7 \times (-4) + 1 \times 3|}{\sqrt{(-4)^2 + 3^2}}$

$$= \frac{25}{5} = 5$$

9. 設 $f(x) = (x^2 + 1)(x + k) + (x + 2)$

由餘式定理知 $f(1) = (1 + 1)(1 + k) + 3 = 3, \therefore k = -1$

$$\therefore f(x) = (x^2 + 1)(x - 1) + (x + 2) = x^3 - x^2 + 2x + 1$$

$$\therefore a = -1, b = 2, c = 1, f(-1) = -1 - 1 - 2 + 1 = -3$$

$$f(0) = 1$$

10. 由根與係數知 $\alpha + \beta = -6, \alpha\beta = 4$

$$\therefore \alpha < 0, \beta < 0, \therefore \sqrt{\alpha} \times \sqrt{\beta} = -\sqrt{\alpha\beta} = -2$$

$$\frac{\sqrt{\beta} + \sqrt{\alpha}}{\sqrt{\alpha} + \sqrt{\beta}} = \frac{(\sqrt{\beta})^2 + (\sqrt{\alpha})^2}{\sqrt{\alpha} \cdot \sqrt{\beta}} = \frac{\alpha + \beta}{-\sqrt{\alpha\beta}} = \frac{-6}{-2} = 3$$

11. 由餘弦定律知 $\overline{AB}^2 = 1^2 + 3^2 - 2 \times 1 \times 3 \times \cos 120^\circ = 13$

$$\therefore \overline{AB} = \sqrt{13}$$

12. $\frac{w-1}{w} = 1+i \Rightarrow 1 - \frac{1}{w} = 1+i \Rightarrow \frac{1}{w} = -i \Rightarrow w = i$

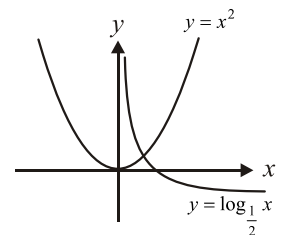
$$\therefore |w-1| = |-1+i| = \sqrt{2}$$

13. \therefore 由 $y = x^2$ 和 $y = \log_{\frac{1}{2}} x$

的圖形知有一個交點

$$\therefore \text{方程式 } x^2 = \log_{\frac{1}{2}} x$$

只有一個實數解



14. (a) $\therefore \sqrt{2} = 2^{\frac{1}{2}}, \sqrt[3]{2} = 2^{\frac{1}{3}}$ 且 $\frac{1}{2} > \frac{1}{3}$

$$\therefore \sqrt{2} > \sqrt[3]{2}, \therefore \sqrt{2} - \sqrt[3]{2} > 0$$

(b) $\because \log_3 2 < \log_3 3 = 1, \therefore (\log_3 2) - 1 < 0$

(c) $\because \log_2 3 > \log_2 2 = 1, \therefore (\log_2 3) - 1 > 0$

(d) $\log_{\frac{1}{3}} \frac{1}{2} = \log_3 2 > 0$

(e) $\log_{\frac{1}{2}} 3 = -\log_2 3 < 0, \therefore$ (a)(c)(d) 為正數

15. $8^{-\frac{2}{3}} = (2^3)^{-\frac{2}{3}} = 2^{-2} = \frac{1}{4}, 9^{\log_3 2} = 9^{\log_9 4} = 4$

$\log_3 27 = 3, \log_4 \sqrt{2} = \log_{2^2} 2^{\frac{1}{2}} = \frac{1}{4}$

\therefore 所求 $= \frac{1}{4} + 4 + 3 - \frac{1}{4} = 7$

16. 分群 $(\frac{1}{1}), (\frac{2}{1}, \frac{1}{2}), (\frac{3}{1}, \frac{2}{2}, \frac{1}{3}), (\frac{4}{1}, \frac{3}{2}, \frac{2}{3}, \frac{1}{4}), \dots$

$\because 1+2+3+\dots+13=91 < 99$

$1+2+3+\dots+14=105 > 99$

\therefore 第 99 項為第 14 群第 8 項即為 $\frac{7}{8}$

17. $\sum_{k=0}^{\infty} (\frac{3^k+1}{5^k}) = \sum_{k=0}^{\infty} (\frac{3}{5})^k + \sum_{k=0}^{\infty} (\frac{1}{5})^k = \frac{1}{1-\frac{3}{5}} + \frac{1}{1-\frac{1}{5}}$

$= \frac{5}{2} + \frac{5}{4} = \frac{15}{4}$

18. 如右圖所示

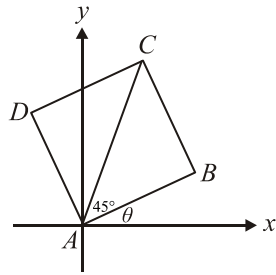
令 θ 表 \overline{AB} 之斜角

$\therefore \tan(\theta + 45^\circ) = 3$

$\Rightarrow \frac{\tan \theta + 1}{1 - \tan \theta} = 3$

$\Rightarrow \tan \theta + 1 = 3 - 3 \tan \theta$

$\Rightarrow \tan \theta = \frac{1}{2}, \therefore \overline{AB}$ 斜率為 $\frac{1}{2}$



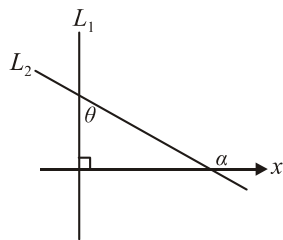
19. L_1 之斜角為 90°

$\therefore L_2$ 之斜率為 $-\frac{1}{\sqrt{3}} = \tan \alpha$

\therefore 直線 L_2 之斜角 α 為 150°

$\therefore \theta = 150^\circ - 90^\circ = 60^\circ$

$\cos 2\theta = \cos 120^\circ = -\frac{1}{2}$



20. 取 A 點對稱於 y 軸之點 $A'(-1,1)$

連 $\overline{A'B}$ 和 y 軸之交點即為所求之 P 點

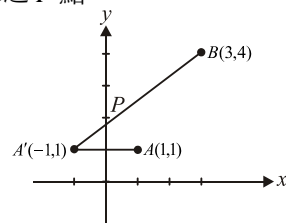
$\overline{A'B}: y-1 = \frac{4-1}{3-(-1)}(x+1)$

$\Rightarrow y-1 = \frac{3}{4}(x+1)$

令 $x=0$ 代入得 $y = \frac{7}{4}$

$\therefore P(0, \frac{7}{4}) = (m, n), \overline{PA} + \overline{PB}$ 之最小值

即為 $\overline{A'B} = \sqrt{[3-(-1)]^2 + (4-1)^2} = 5 = k$



$\therefore m+4n+k = 0+4 \times \frac{7}{4} + 5 = 12$

21. 聯立不等式

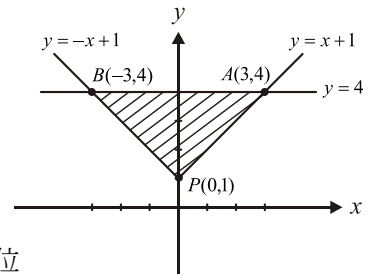
$$\begin{cases} y \geq |x| + 1 \\ y \leq 4 \end{cases}$$

所圍之區域為圖中

斜線部分 $\triangle ABP$

$\triangle ABP$ 面積

$= \frac{1}{2} \times 6 \times 3 = 9$ 平方單位



22. 令 $\overline{OB} = x$

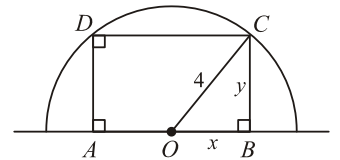
$\overline{BC} = y$

$\therefore x^2 + y^2 = 4^2 = 16$

由算幾不等式知

$\frac{x^2 + y^2}{2} \geq \sqrt{x^2 y^2} \Rightarrow 8 \geq xy \Rightarrow 2xy \leq 16$

$\therefore ABCD$ 最大面積為 16 平方公分



23. 圓方程式 $2x^2 + 2y^2 - 8x + 12y + 8 = 0$

$(\div 2) \Rightarrow x^2 + y^2 - 4x + 6y + 4 = 0$

$\Rightarrow (x-2)^2 + (y+3)^2 = 9$

\therefore 圓心 $(h, k) = (2, -3), r = 3, \therefore h+k+r = 2$

24. $\because P(m, n)$ 在 $y^2 - x = 0$ 上, $\therefore m = n^2$

$P(m, n)$ 到 $L: x + 2y + 6 = 0$ 之距離

$k = \frac{|m + 2n + 6|}{\sqrt{1^2 + 2^2}} = \frac{|n^2 + 2n + 6|}{\sqrt{5}} = \frac{|(n+1)^2 + 5|}{\sqrt{5}}$

當 $n = -1$ 時 k 有最小值 $\frac{5}{\sqrt{5}} = \sqrt{5}$

$\therefore P(1, -1) = (m, n)$ 時 k 最小值為 $\sqrt{5}$

$\therefore k^2 + m^2 - n^2 = 5 + 1 - 1 = 5$

25. $\frac{y^2}{25} - \frac{(x-1)^2}{144} = 1 \Rightarrow a = 5, b = 12$

P 為雙曲線上一點, 由定義知 $|\overline{PQ_1} - \overline{PQ_2}| = 2a = 10$